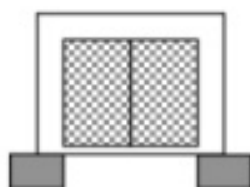


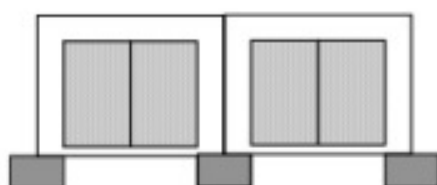
Name _____

Roger keeps pet rabbits. He keeps them in a row of rabbit hutches. The hutches are on blocks so that they don't get damp.



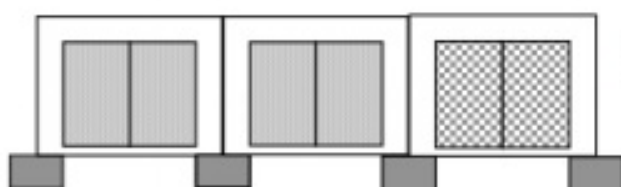
This is hutch #1.

It is for one rabbit.
It has 2 doors and 2 blocks.



This is hutch #2.

It is for two rabbits.
It has 4 doors and 3 blocks.



This is hutch #3.

It is for three rabbits.
It has 6 doors and 4 blocks.

1. Fill in the empty spaces in the table below.

Hutch	1	2	3
Number of doors			
Number of blocks			

Grade 4, Adapted from Roger's Rabbits Copyright ©2008 by Mathematics Assessment Resource Service All rights reserved.